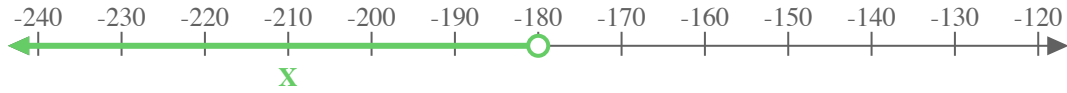





Use the numberline to express the inequality.

Ex) $X < -180$



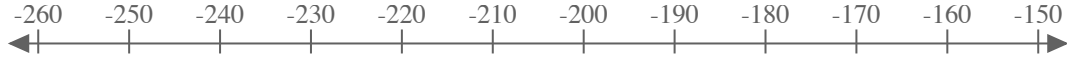
1) $X \leq 60$



2) $X \geq -5$




3) $X \leq -200$




4) $X \geq 20$



5) $X \leq 60$



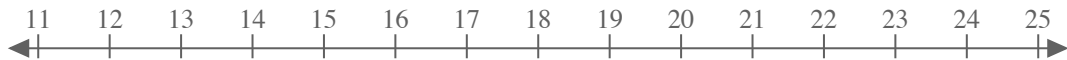
6) $X < 12$



7) $X < 40$



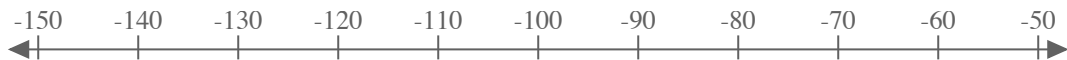
8) $X < 18$



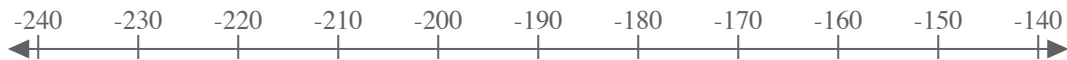
9) $X \geq -5$



10) $X > -100$



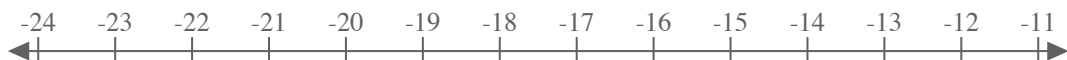
11) $X > -190$



12) $X \leq -1$



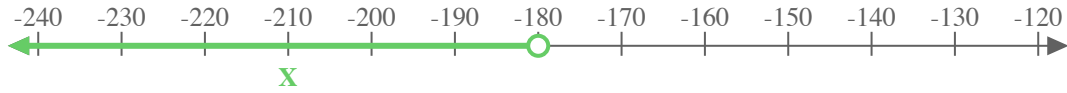
13) $X > -18$



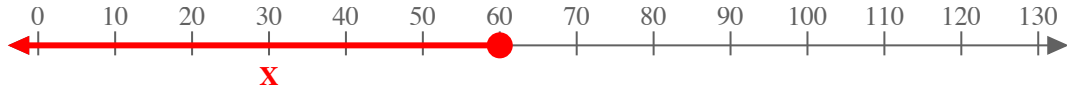


Use the numberline to express the inequality.

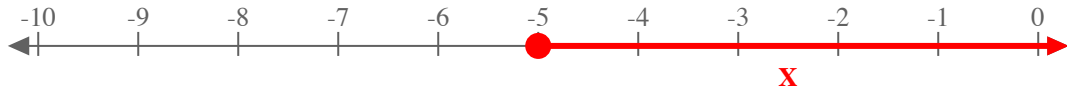
Ex) $X < -180$



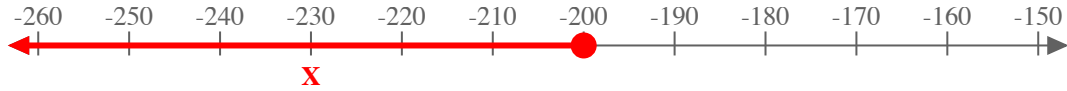
1) $X \leq 60$



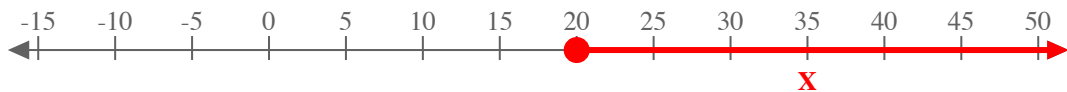
2) $X \geq -5$



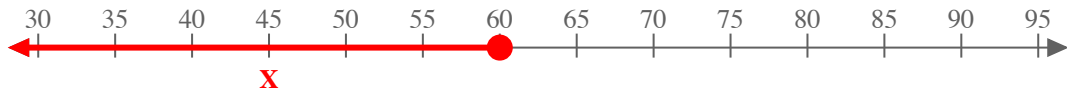
3) $X \leq -200$



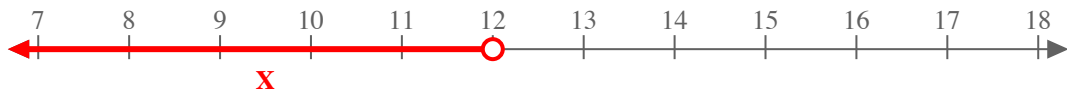
4) $X \geq 20$



5) $X \leq 60$



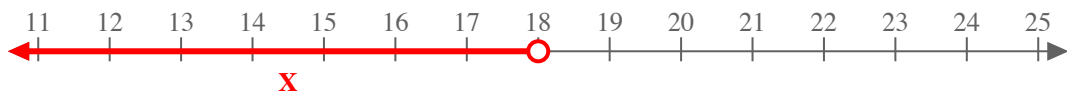
6) $X < 12$



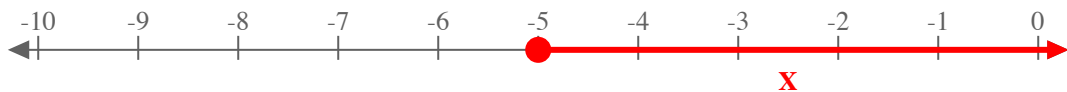
7) $X < 40$



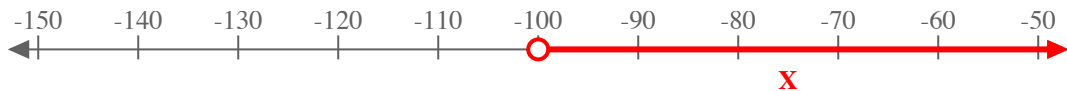
8) $X < 18$



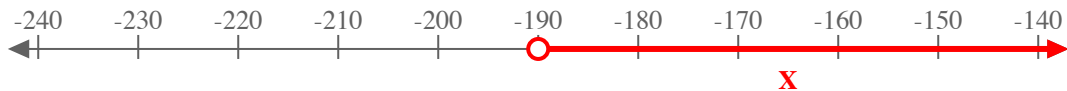
9) $X \geq -5$



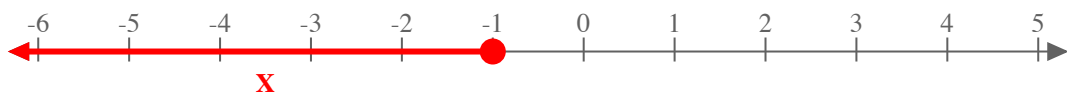
10) $X > -100$



11) $X > -190$



12) $X \leq -1$



13) $X > -18$

