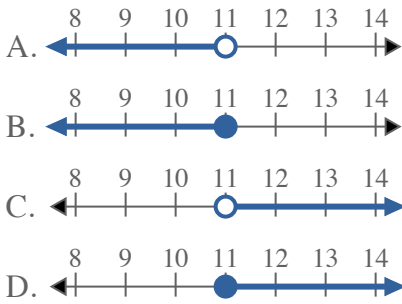


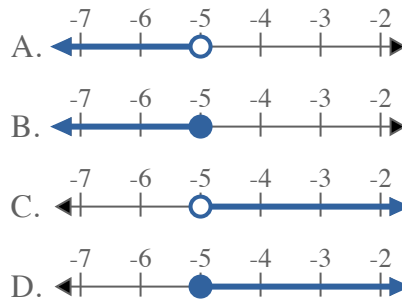


Solve each problem.

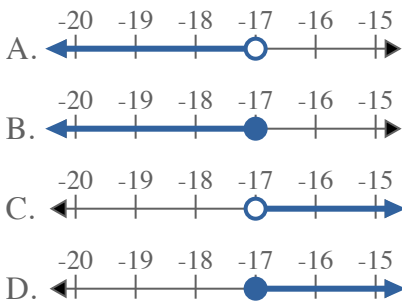
1) Which option best shows  $X > 11$



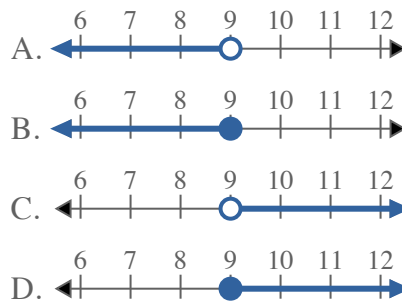
2) Which option best shows  $X > -5$



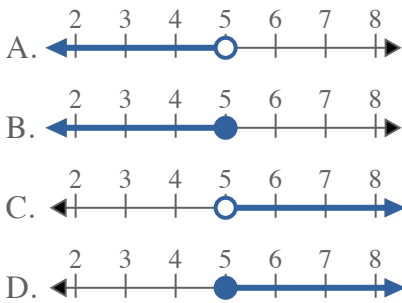
3) Which option best shows  $X > -17$



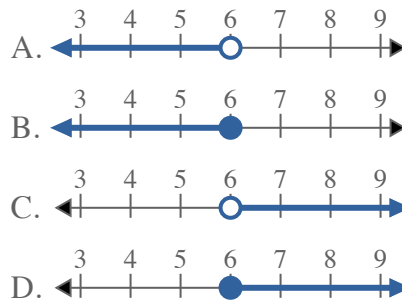
4) Which option best shows  $X > 9$



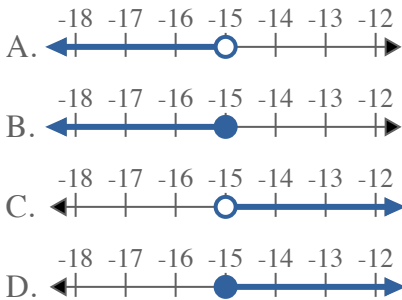
5) Which option best shows  $X \leq 5$



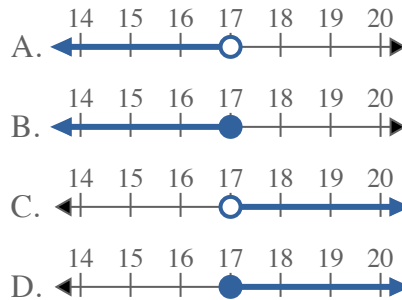
6) Which option best shows  $X \leq 6$



7) Which option best shows  $X < -15$



8) Which option best shows  $X < 17$



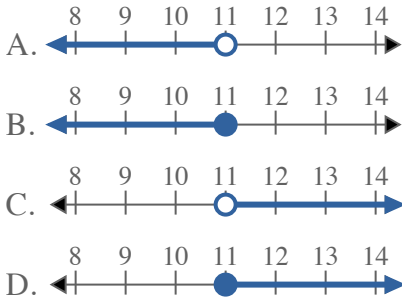
Answers

1. \_\_\_\_\_
2. \_\_\_\_\_
3. \_\_\_\_\_
4. \_\_\_\_\_
5. \_\_\_\_\_
6. \_\_\_\_\_
7. \_\_\_\_\_
8. \_\_\_\_\_

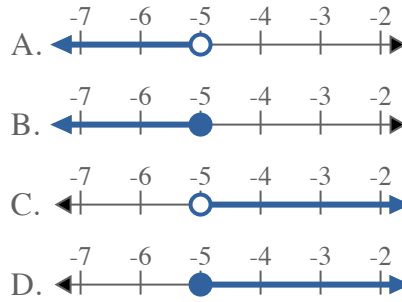


Solve each problem.

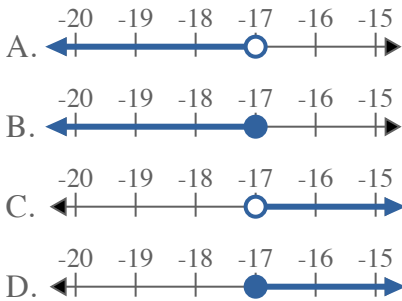
1) Which option best shows  $X > 11$



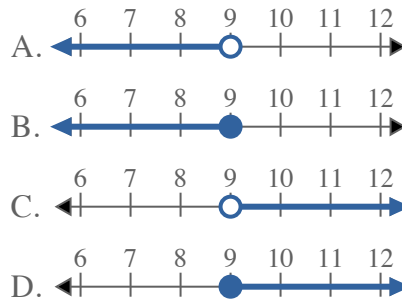
2) Which option best shows  $X > -5$



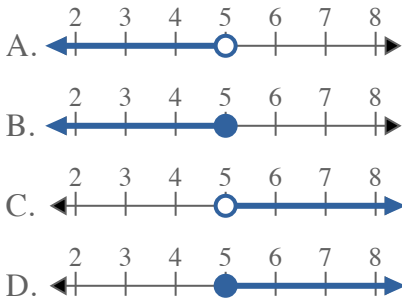
3) Which option best shows  $X > -17$



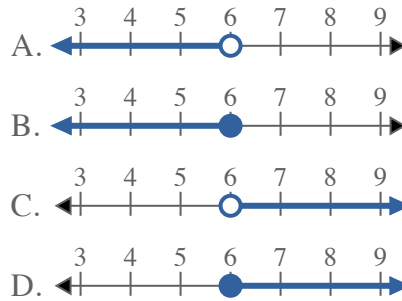
4) Which option best shows  $X > 9$



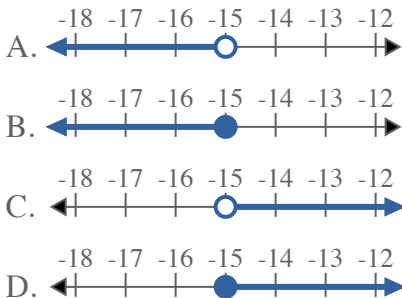
5) Which option best shows  $X \leq 5$



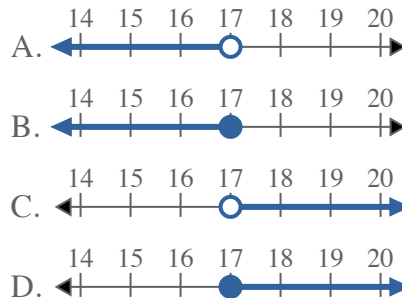
6) Which option best shows  $X \leq 6$



7) Which option best shows  $X < -15$



8) Which option best shows  $X < 17$



Answers

1.           **C**
2.           **C**
3.           **C**
4.           **C**
5.           **B**
6.           **B**
7.           **A**
8.           **A**