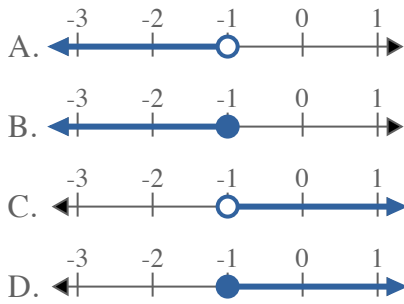


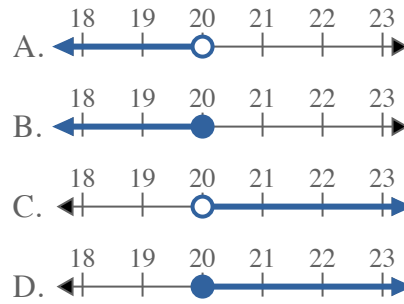


Solve each problem.

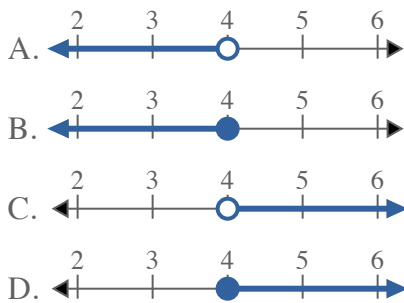
1) Which option best shows $X \geq -1$



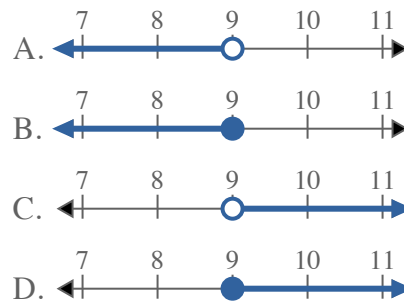
2) Which option best shows $X \geq 20$



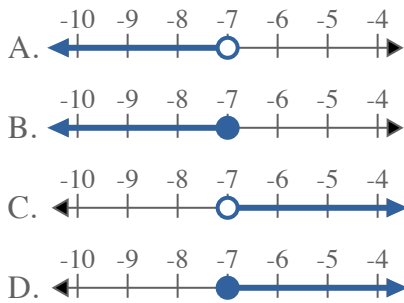
3) Which option best shows $X \leq 4$



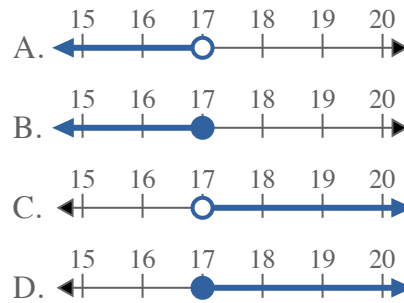
4) Which option best shows $X \geq 9$



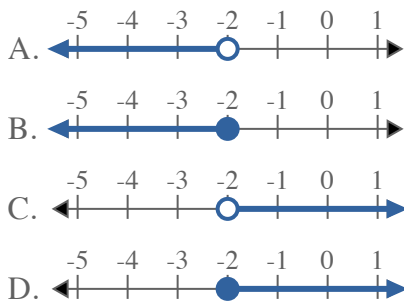
5) Which option best shows $X \leq -7$



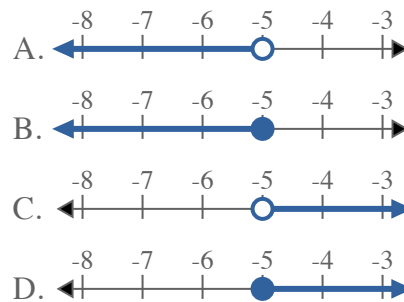
6) Which option best shows $X \geq 17$



7) Which option best shows $X \leq -2$



8) Which option best shows $X > -5$



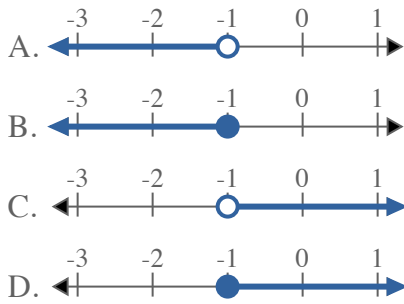
Answers

1. _____
2. _____
3. _____
4. _____
5. _____
6. _____
7. _____
8. _____

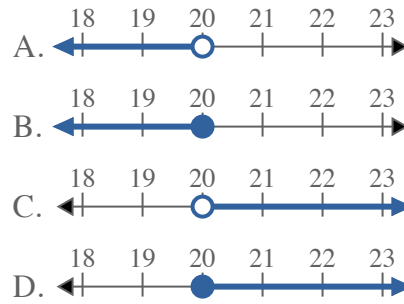


Solve each problem.

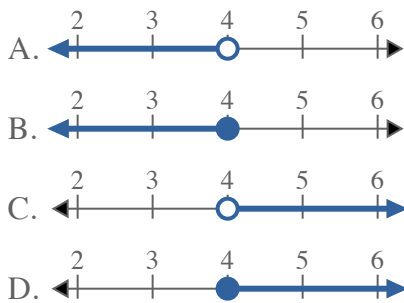
1) Which option best shows $X \geq -1$



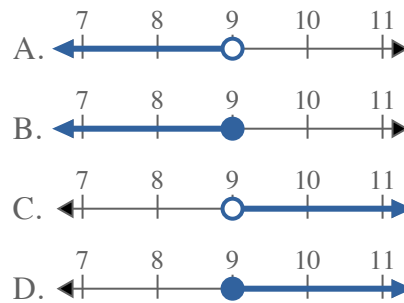
2) Which option best shows $X \geq 20$



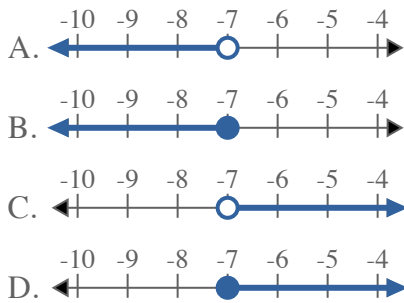
3) Which option best shows $X \leq 4$



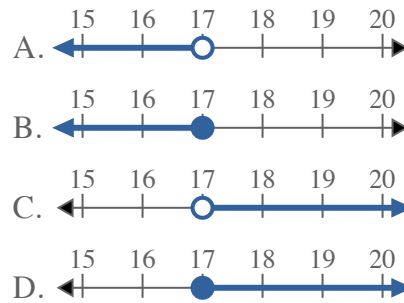
4) Which option best shows $X \geq 9$



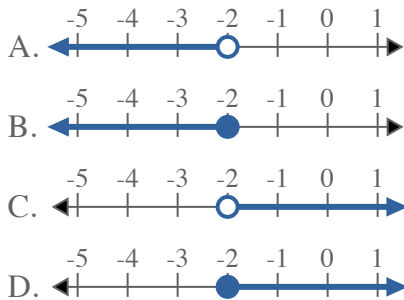
5) Which option best shows $X \leq -7$



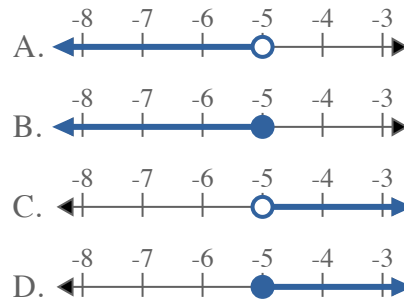
6) Which option best shows $X \geq 17$



7) Which option best shows $X \leq -2$



8) Which option best shows $X > -5$



Answers

1. **D**
2. **D**
3. **B**
4. **D**
5. **B**
6. **D**
7. **B**
8. **C**