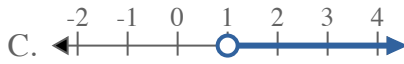


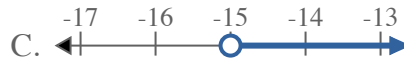


Solve each problem.

1) Which option best shows $X \leq 1$



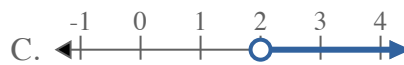
2) Which option best shows $X \geq -15$



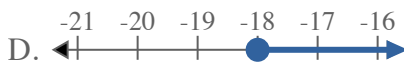
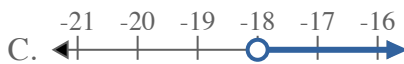
3) Which option best shows $X < 4$



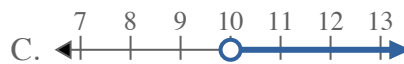
4) Which option best shows $X \geq 2$



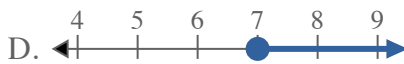
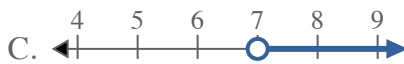
5) Which option best shows $X \geq -18$



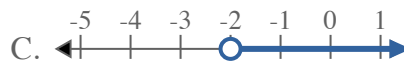
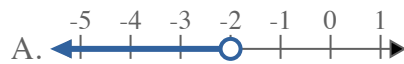
6) Which option best shows $X \geq 10$



7) Which option best shows $X \leq 7$



8) Which option best shows $X > -2$



Answers

1. _____

2. _____

3. _____

4. _____

5. _____

6. _____

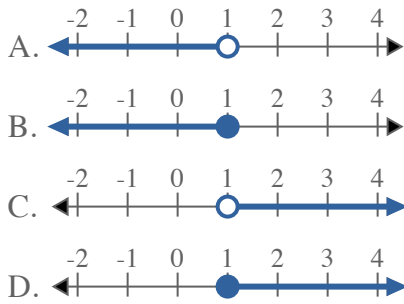
7. _____

8. _____

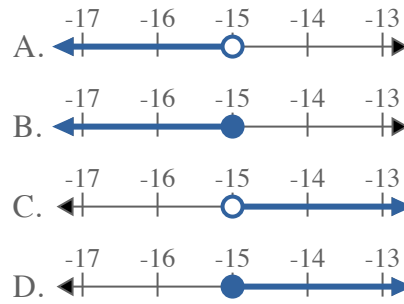


Solve each problem.

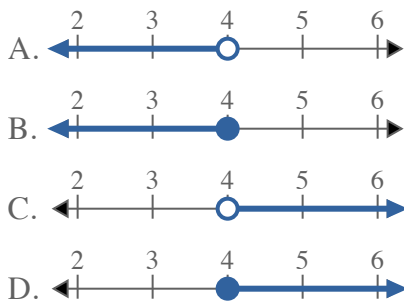
1) Which option best shows $X \leq 1$



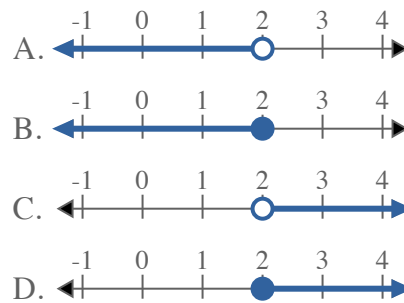
2) Which option best shows $X \geq -15$



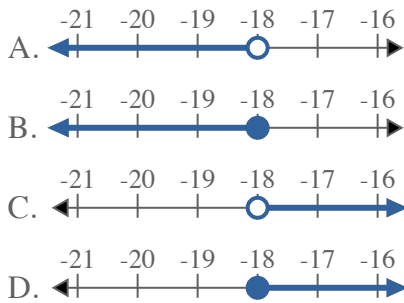
3) Which option best shows $X < 4$



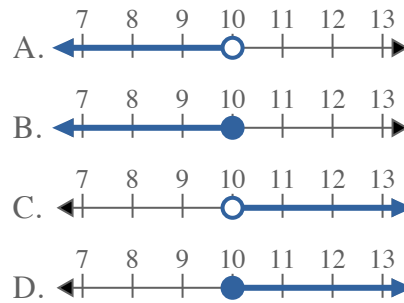
4) Which option best shows $X \geq 2$



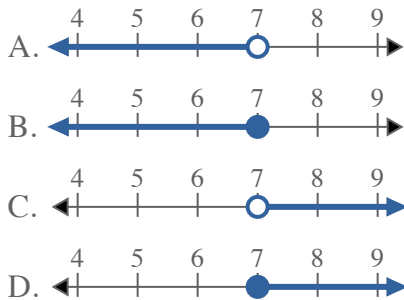
5) Which option best shows $X \geq -18$



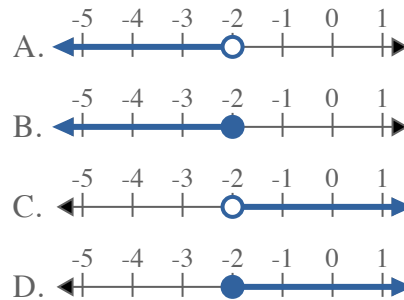
6) Which option best shows $X \geq 10$



7) Which option best shows $X \leq 7$



8) Which option best shows $X > -2$



Answers

1. **B**
2. **D**
3. **A**
4. **D**
5. **D**
6. **D**
7. **B**
8. **C**