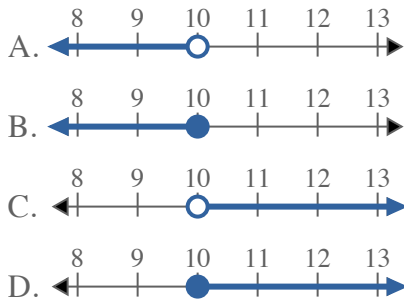


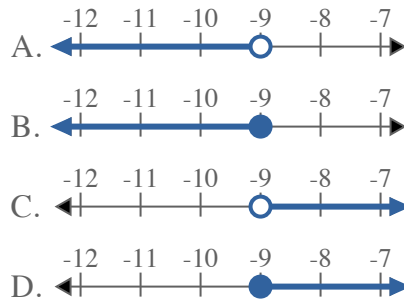


Solve each problem.

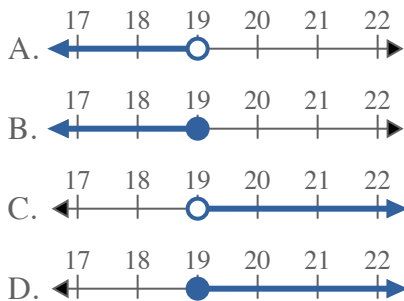
1) Which option best shows $X > 10$



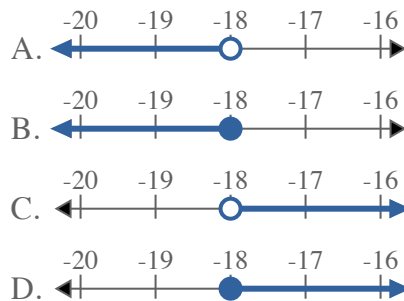
2) Which option best shows $X \leq -9$



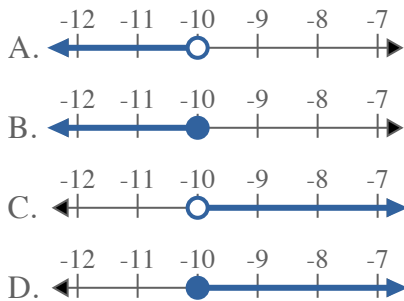
3) Which option best shows $X \leq 19$



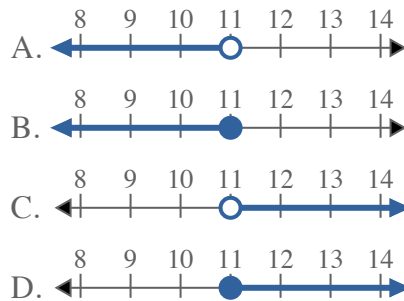
4) Which option best shows $X > -18$



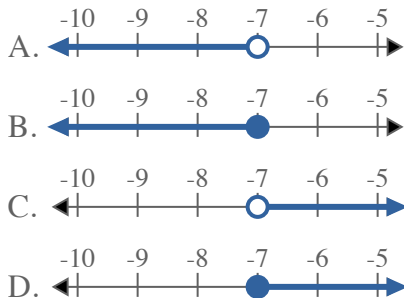
5) Which option best shows $X \leq -10$



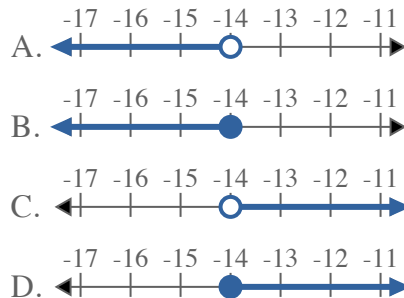
6) Which option best shows $X \geq 11$



7) Which option best shows $X \leq -7$



8) Which option best shows $X > -14$



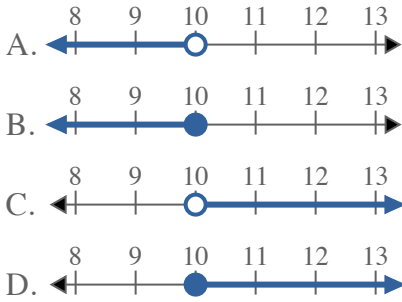
Answers

1. _____
2. _____
3. _____
4. _____
5. _____
6. _____
7. _____
8. _____

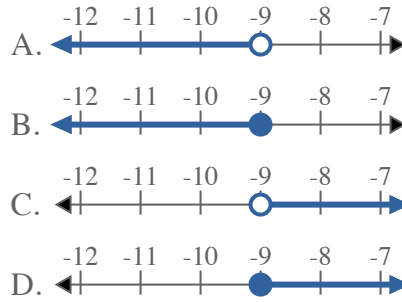


Solve each problem.

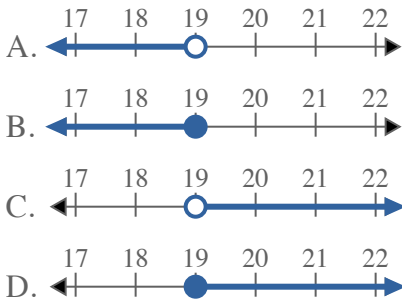
1) Which option best shows $X > 10$



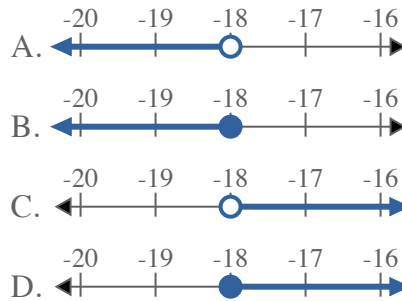
2) Which option best shows $X \leq -9$



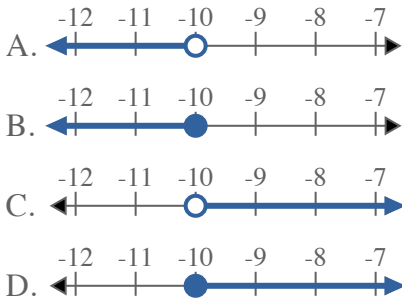
3) Which option best shows $X \leq 19$



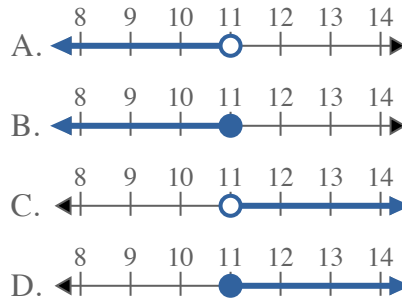
4) Which option best shows $X > -18$



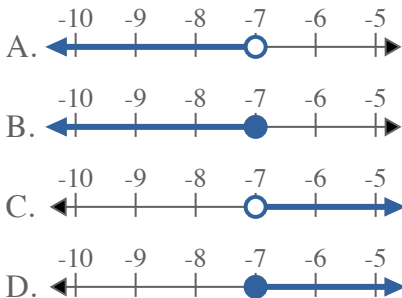
5) Which option best shows $X \leq -10$



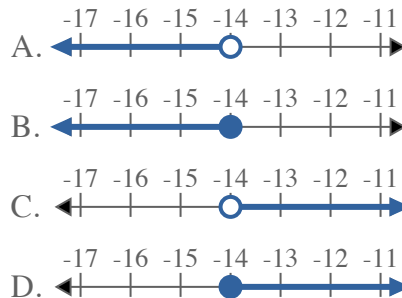
6) Which option best shows $X \geq 11$



7) Which option best shows $X \leq -7$



8) Which option best shows $X > -14$



Answers

1. **C**
2. **B**
3. **B**
4. **C**
5. **B**
6. **D**
7. **B**
8. **C**