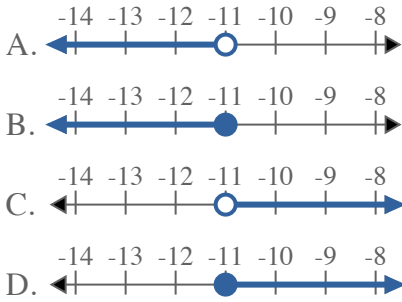


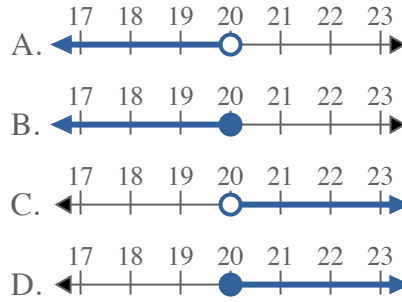


Solve each problem.

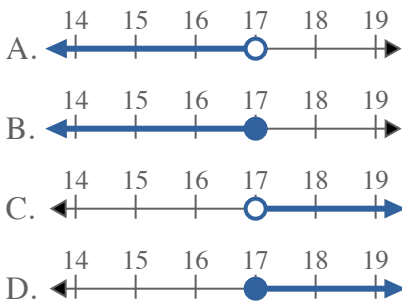
1) Which option best shows $X < -11$



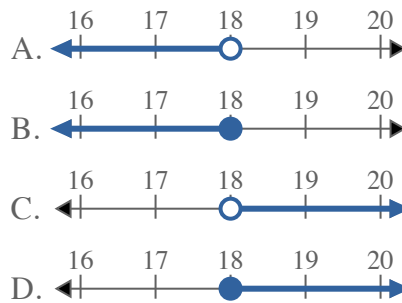
2) Which option best shows $X < 20$



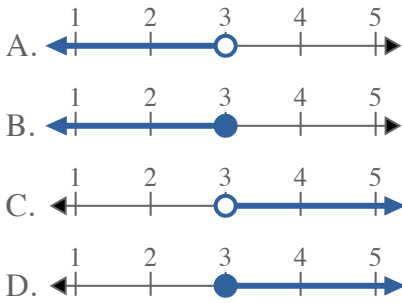
3) Which option best shows $X > 17$



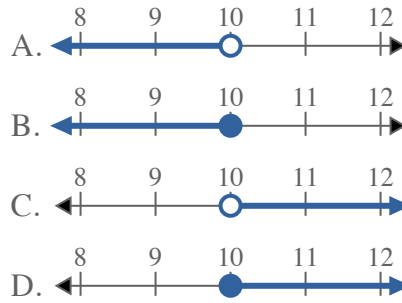
4) Which option best shows $X > 18$



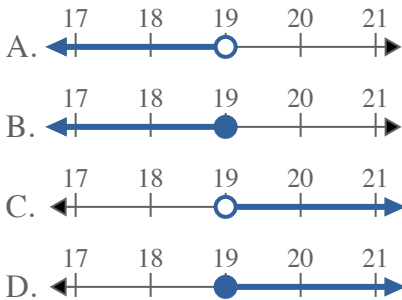
5) Which option best shows $X < 3$



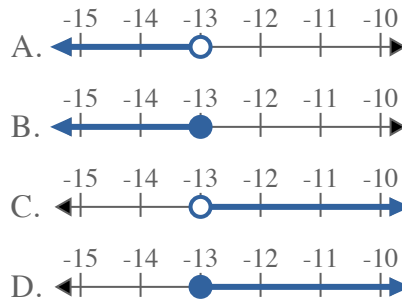
6) Which option best shows $X > 10$



7) Which option best shows $X \leq 19$



8) Which option best shows $X < -13$



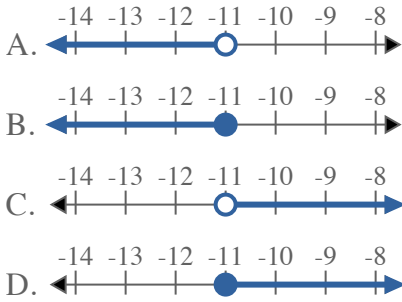
Answers

1. _____
2. _____
3. _____
4. _____
5. _____
6. _____
7. _____
8. _____

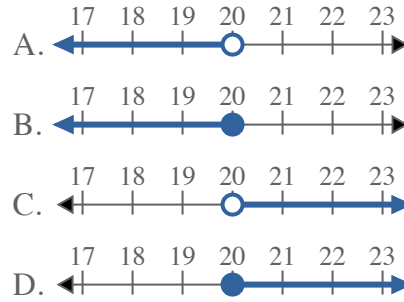


Solve each problem.

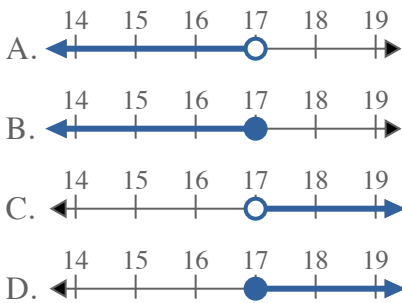
1) Which option best shows $X < -11$



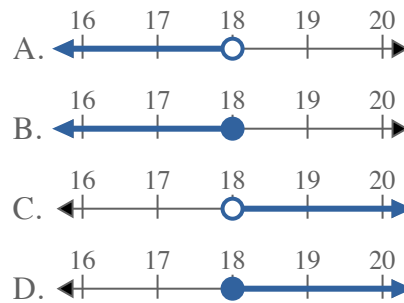
2) Which option best shows $X < 20$



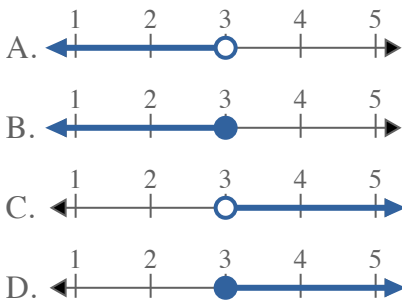
3) Which option best shows $X > 17$



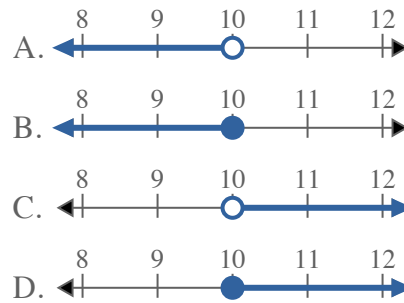
4) Which option best shows $X > 18$



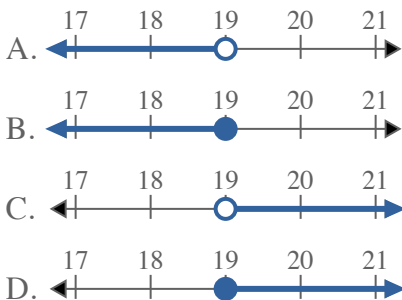
5) Which option best shows $X < 3$



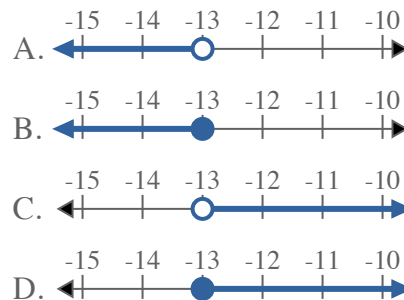
6) Which option best shows $X > 10$



7) Which option best shows $X \leq 19$



8) Which option best shows $X < -13$



Answers

1. **A**
2. **A**
3. **C**
4. **C**
5. **A**
6. **C**
7. **B**
8. **A**